

Write the letter name of each note.

A musical staff with a treble clef and a bass clef. The treble clef staff contains five whole notes: G4, A4, B4, C5, and D5. The bass clef staff contains five whole notes: G2, A2, B2, C3, and D3.

Number each interval.

A musical staff with a treble clef containing eight intervals: 1. G4 to A4 (major second), 2. G4 to B4 (major third), 3. G4 to C5 (perfect fourth), 4. G4 to D5 (perfect fifth), 5. G4 to A4 (major second), 6. G4 to F4 (minor second), 7. G4 to A#4 (augmented second), 8. G4 to B4 (major third).

Write the letter name of each chord.

A musical staff with a treble clef containing eight chords: 1. G major triad, 2. G# major triad, 3. G# minor triad, 4. G# minor triad, 5. G major triad, 6. G major triad, 7. G major triad, 8. G# major triad.

Add barlines to make the counting correct in each measure.

A musical staff with a treble clef and a 3/4 time signature. The notes are: quarter note G4, quarter note A4, quarter note B4, half note C5, quarter note D5, quarter note E5, quarter note F5, quarter note G5, quarter note A5, quarter note B5, quarter note C6, quarter note D6, quarter note E6, quarter note F6, quarter note G6.

Identify each key signature in major and also in minor where indicated.

Five musical staves with key signatures: 1. Treble clef, one sharp (F#), 2. Treble clef, one flat (Bb), 3. Bass clef, one flat (Bb), 4. Treble clef, two sharps (F#, C#), 5. Bass clef, one sharp (F#).





_____ M _____ M _____ m _____ M _____ m _____ M _____ M _____ m

Write the A Major scale with proper sharps or flats.

A blank musical staff with a treble clef, intended for writing the A Major scale.

Write the letter of the correct answer in the blank.

- _____ Crescendo
- _____ Half rest
- _____ Accent
- _____ Whole rest
- _____ Eighth rest
- _____ Fortissimo
- _____ Smooth, connected
- _____ Gradually get slower
- _____ Go back to the beginning

- A. *Legato*
- B. *rit.*
- C. **D.C.**
- D. ***ff***
- E. 
- F. 
- G. 
- H. 
- I. 