

Write the letter name of each note.

A grand staff with two staves. The upper staff contains five whole notes: C4, E4, G4, B4, and C5. The lower staff contains five whole notes: C3, E3, G3, B3, and C4.

\_\_\_\_\_

Number each interval.

A single staff with eight pairs of notes. The intervals are: C4 to E4, C4 to G4, C4 to Bb4, C4 to B4, C4 to C5, C4 to D5, C4 to E5, and C4 to F5.

\_\_\_\_\_

Write the letter name of each chord.

A grand staff with six measures. Measure 1: Treble clef, key signature of one sharp (F#), chord C#m. Measure 2: Treble clef, chord C#m. Measure 3: Bass clef, chord C#m. Measure 4: Treble clef, key signature of one sharp (F#), chord C#m. Measure 5: Treble clef, chord C#m. Measure 6: Bass clef, chord C#m.

\_\_\_\_\_

Fill in the time signature for each example.

A single staff with a melody consisting of quarter and eighth notes. The melody is: C4 (quarter), D4 (quarter), E4 (quarter), F4 (quarter), G4 (quarter), A4 (quarter), B4 (quarter), C5 (quarter), B4 (quarter), A4 (quarter), G4 (quarter), F4 (quarter), E4 (quarter), D4 (quarter), C4 (quarter).







Identify each key signature.

Five staves showing key signatures: 1. Treble clef, two sharps (F#, C#). 2. Treble clef, one sharp (F#). 3. Bass clef, one sharp (F#). 4. Treble clef, three sharps (F#, C#, G#). 5. Bass clef, one sharp (F#).

\_\_\_\_\_

Write the letter of the correct answer in the blank.

- \_\_\_\_\_ Slur
- \_\_\_\_\_ Whole rest
- \_\_\_\_\_ Natural
- \_\_\_\_\_ Diminuendo
- \_\_\_\_\_ Tie
- \_\_\_\_\_ Da Capo
- \_\_\_\_\_ Staccato
- \_\_\_\_\_ Loud
- \_\_\_\_\_ Fermata
- \_\_\_\_\_ Moderately soft

- A. *f*
- B. *mp*
- C. **D.C.**
- D. 
- E. 
- F. 
- G. 
- H. 
- I. 
- J. 